

①

Q. No. Q1 A. Select the correct option and complete the following

- i) b) rate of reaction is independent of the concentration of the reacting species
- ii) c) 1
- iii) c) independent of initial concentration
- iv) c) Addition of chemicals reduces the surface tension of a liquid
- v) b) surface tension
- vi) c) $2\pi r\gamma = mg$
- vii) b) Phosphorous
- viii) b) sp^2
- ix) b) Boron-Silicon
- x) a) Na_2CO_3
- xi) b) p-block
- xii) c) non availability of the d-orbitals
- xiii) a) Meso
- xiv) b) 2
- xv) a) Eclipsed
- xvi) a) 2
- xvii) a) Inactive
- xviii) b) Enantiomers

2

Q.1.(B) State whether true or false

- i. True
- ii. False
- iii. True
- iv. False
- v. False
- vi. True

Q.1.(C) Match the following

~~Column B~~

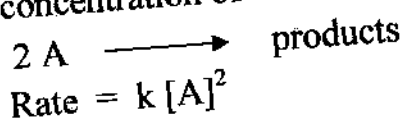
- i) e) $\text{mole}^{-1} \text{ litres}^{-1}$
- ii) d) $\frac{(n^2-1) \times M}{(n^2+2) d}$
- iii) h) CO_2
- iv) f) 1
- v) a) clockwise
- vi) b) similar groups on the same side
- vii)

Q. No.

3

Q.2 (A) Derive an expression for the rate constant of a second order reaction of reactants having equal concentration .

Second order reaction is when the rate of the reaction is proportional to the second power of the concentration of the reactant. The rate is influenced by the concentration of two reactants



Let 'a' mol/dm³ be the initial concentration of the reactant at time x' mol/dm³ of the reactant react at time t and get converted to products

(a-x) mol/dm³ will be the concentration of reactant at time t
Rate $dx/dt = k(a-x)^2$ where 'k' is the rate constant

$$\int_{x=0}^{x=x} \frac{dx}{(a-x)^2} = k \int_{t=0}^{t=t} dt$$

$$1/(a-x) + \text{constant} = kt \dots\dots\dots \text{eq (1)}$$

when $t=0$ $x=0$ substituting in eq (1)

$$\therefore \text{constant} = -1/a$$

Substituting $-1/a$ in constant in eq (1)

$$1/(a-x) - 1/a = kt$$

$$k = \frac{x}{a(a-x)} \times \frac{1}{t}$$

1 mark

1 mark

3 marks

4

Q.2. (C) i) Half life time : Half life time is the time it takes for the concentration of a reactant to fall to half of its original value **1 mark**

ii) Half life time method for the determination: **4 marks**

The time at which one-half of the substance has disappeared is determined and the experiment is repeated with different initial concentrations of the reactants. The order (n) is then determined where 'a' is the initial concentration

$$(t_{1/2})_1 \propto 1/a^{n-1} \quad \therefore t_{1/2} = k a^{1-n} \quad \therefore \log t_{1/2} = \log k + (1-n) \log a$$

A plot of graph of $\log t_{1/2}$ vs $\log a$ gives a straight line with a slope $(1-n)$.

From the slope the order (n) of the reaction can be determined.

If half life at different concentration is given i.e. $(t_{1/2})_1$ and $(t_{1/2})_2$ then

$$(t_{1/2})_1 \propto 1/a_1^{n-1} \quad \text{and} \quad (t_{1/2})_2 \propto 1/a_2^{n-1} \quad \text{then}$$

$$\frac{(t_{1/2})_1}{(t_{1/2})_2} = \frac{a_2^{n-1}}{a_1^{n-1}}$$

\therefore Order of Reaction (n) is

$$n = 1 + \frac{(\log t_{1/2})_1 - (\log t_{1/2})_2}{\log a_2 - \log a_1}$$

Q.2.B Given

Time (min)	9.82	59.6	93.8	142.9
% remaining	96.5	80.3	71.0	59.2

To determine order:

Solve: $k = \frac{2.303}{t} \log \frac{a}{(a-x)}$ **1 mark**

i) For $a=100$ $a-x = 96.5$ $t = 9.82$
 $k = \frac{2.303}{9.82} \log(100/96.5) = 3.628 \times 10^{-3} \text{ min}^{-1}$

ii) For $a=100$ $a-x = 80.3$ $t = 59.6$
 $k = \frac{2.303}{59.6} \log(100/80.3) = 3.681 \times 10^{-3} \text{ min}^{-1}$

iii) For $a=100$ $a-x = 71.0$ $t = 93.8$
 $k = \frac{2.303}{93.8} \log(100/71.0) = 3.652 \times 10^{-3} \text{ min}^{-1}$

iv) For $a=100$ $a-x = 59.2$ $t = 142.9$
 $k = \frac{2.303}{142.9} \log(100/59.2) = 3.669 \times 10^{-3} \text{ min}^{-1}$

2 marks

➤ The order is equal to 1 **1 mark**

➤ The mean rate constant = $\frac{(3.628 + 3.681 + 3.652 + 3.669) \times 10^{-3}}{4}$
 $= 3.657 \times 10^{-3} \text{ min}^{-1}$ **1 mark**



Questions should be —
 WRITTEN IN LEGIBLE HANDWRITING IN BLACK INK
 SIGNS, SKETCHES OR FIGURES IF ANY BE DRAWN IN NEAT BLACK INK.
 so as to avoid mistakes in the printed question papers

Duration Hours.

Total Marks assigned to the paper

Marks

Q. No.

N.B. :

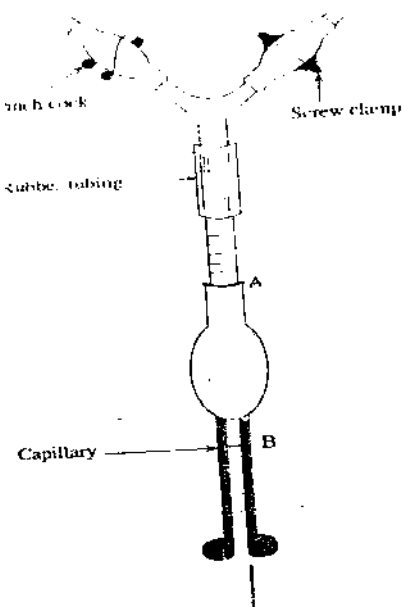
- 2.(D) Definition - 1 Mark
 Equation - 1 Mark
 Diagram- 1 Mark
 Procedure- 2 Marks

Surface tension is defined as the force in (Newton) acting along the surface of liquid at right angles to any line of unit length (1 m)

Procedure

- i) Clean the stalagmometer with chromic acid mixture, wash with water and dry it.
- ii) Attach a small piece of rubber tube having a screw pinch cock at the upper end of the stalagmometer.
- iii) Immerse the lower end of the stalagmometer in distilled water and suck the water 1-2 cm above mark 'A'. Adjust the pinch cock so that 10-15 drops fall per minute.
- iv) Clamp the stalagmometer, allow the water drops to fall and start counting the number of drops, when the meniscus crosses the upper mark 'A' and stop counting when the meniscus passes mark 'B'.
- v) Repeat the exercise to take three to four readings.
- vi) Rinse the stalagmometer with alcohol and dry it.
- vii) Suck the given liquid in the stalagmometer and count the drops as in case of water.
- viii) Let n_1 be the number of drops formed by the given liquid with density d_1 and surface tension γ_1 .
- ix) Let n_2 be the number of drops, d_2 density and γ_2 surface tension of the reference liquid. Then,

$$\gamma_1 / \gamma_2 = n_2 d_1 / n_1 d_2$$
- x) Knowing the densities of two liquids and the value of surface tension of one of the liquids, surface tension of other liquid can be calculated.



Q. No.

(E) Refractive Index - The refractive index of a medium is defined as the ratio of velocity of light in vacuum to that in the medium. \rightarrow 1 mark.

Solution -

$$\text{Given, } n = 1.6, \quad d = 0.87 \text{ g cm}^3$$

$$\text{MW} = 78.$$

Molar refraction

$$R_M = \frac{n^2 - 1}{n^2 + 2} \times \frac{M}{d} \rightarrow 1 \text{ Mark}$$

$$= \frac{(1.6)^2 - 1}{(1.6)^2 + 2} \times \frac{78}{0.87} \rightarrow 2 \text{ Marks}$$

$$= 0.3421 \times 89.6551$$

$$\text{Molar refraction} = 30.6710 \text{ cm}^3 \text{ mol}^{-1} \rightarrow 1 \text{ Mark}$$

2. No.

Marks

7

2 (F)

Definition of liquid Crystal-1 mark

Naming of different Classes- 1 mark

Explanation of each class with example- 3 marks

Liquid Crystals- A substance which flows like a liquid but has some degree of ordering in the arrangement of its molecules is called liquid crystals.

Liquid crystals are classified in to three catagories-

- i. Smectic liquid crystals- Flow in layers in different planes and sheets giiding over each other.It has non-Newtonian motion. Examples- ethyl-azoxy benzoate, ethyl-p-azoxy cinnamate.
- ii. Nematic liquid crystals- They flow more readily. Their flow is Newtonian. They have thread like structure. Examples- p-azoxy anisole, p-methoxy cinnamic acid.
- iii. Chloesteric liquid crystals- These have some nematic and smectic characteristics. They have high non-Newtonian flow. Example- Chloesteryl benzoate.

(05)

Q3

8

(A) Metallic and non-metallic nature of an element is defined by its electropositive character. It is tendency of an element in its gaseous state to lose one or more electrons to form gaseous cations. Higher the value of electropositive character higher is metallic tendency. As the ionization energy decreases electropositive character increases and hence metallic character also increases.

gp I Li to Cs ionization energy decreases hence metallic character increases.

gp 2 Be to Ba ionization energy ~~is~~ is higher than corresponding alkali metals hence less electropositive than alkali metals metallic properties increases down the group.

gp 13 B to Al metallic character increases. But from Al to Tl is almost same because the difference in their ionization energy is small.

gp 14 Two elements carbon and silicon are distinctly non metal, germanium is metalloid.

Sn and Pb are metals.

gp 15 With the increase in electropositive metallic character from N to Bi metallic character increases.

gp 16 The non-metallic character is stronger with oxygen and sulphur and weaker with selenium and tellurium. The last element - Po is distinctly metal.

gp 17 elements are halogen they are least basic in nature from fluorine to iodine electropositive and metallic character increases. Fluorine shows highest electronegativity of 4.

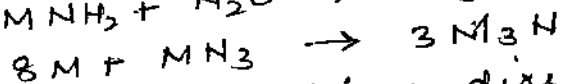
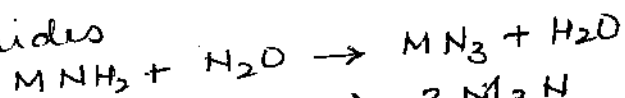
(B) The reluctance of ns electron pair from taking part in bonding is called inert pair effect, which is observed in elements. The stability of lower oxidation state oxidation state

3) decreases down the group.
 The elements of group 15 have $ns^2 np^3$ configuration (02 marks)
 hence oxidation states are +3, +5 and -3. The stability of +3 o.s. increases and +5 decreases from N to Bi due to inert pair effect. N don't form compound with +5 oxidation state because of absence of d orbitals. In -3 oxidation state, the elements have the tendency to act as electron pair donors.

The elements of group 16 have $ns^2 np^4$, hence (02 marks)
 oxidation states are -2, +2, +4 and +6. Since elements have 6 valence electrons they tend to gain or share 2 electrons to attain stable orbit. Oxygen is most electronegative shows tendency to gain 2 electrons exhibits -2 o.s. Oxygen is different from other elements due to (a) small size (b) high ionization potential (c) more electronegativity (d) non-availability of d-orbital (e) exhibits -2 oxidation state. The last element ^{Po} is most electropositive hence does not show -2 oxidation state.

(C) Nitrides are binary compounds of nitrogen with an element which is more electropositive or less electronegative than nitrogen.
 Types of nitrides (1) Ionic nitrides (2) covalent
 (3) interstitial nitrides (explanation is expected) (03 marks)
 Alkali and alkaline earth metals form ionic nitrides

Alkali metals do not combine directly with nitrogen to form nitrides (MNS).
 first azide is formed then converted to nitrides (01)



Only lithium combines directly with nitrogen to form Li_3N (01)

Alkaline earth metals burn in N_2 atmosphere & form nitrides
 $3M + N_2 \rightarrow M_3N_2$ (M = Mg, Ca, Sr, Ba)

As it is formed by the action of NH_3

D. 10

Boron belongs to group 13 the unusual characteristics as compared to other group elements are because of

- (i) Small ionic radius
- (ii) compounds act as strong Lewis acids
- (iii) Boron shows maximum covalency 4
- (iv) does not show inert-pair effect

E.

Method of preparation of caustic soda (any one)
 Chemical properties (any two)
 Uses (any two)

(01) mark
 (02) mark
 (02) mark

F.

Sulphuric acid droplets and sulphate compounds formed by SO₂ affect visibility, causes nose, eye, lung irritations. Sulphur aerosols penetrate inner most passage of lungs they cause broncho-constriction.

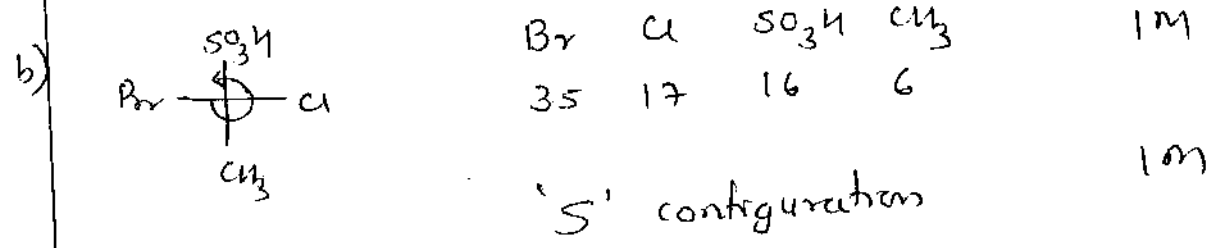
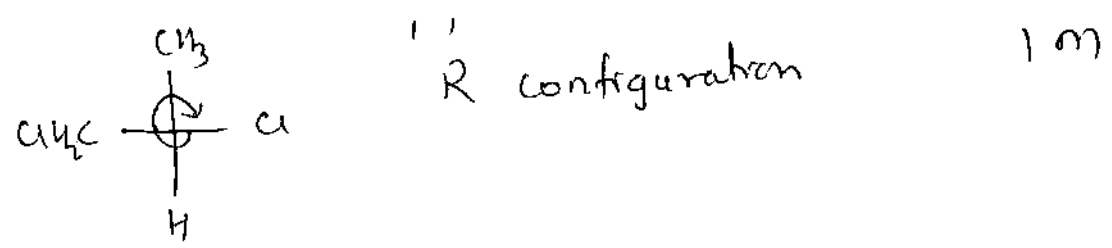
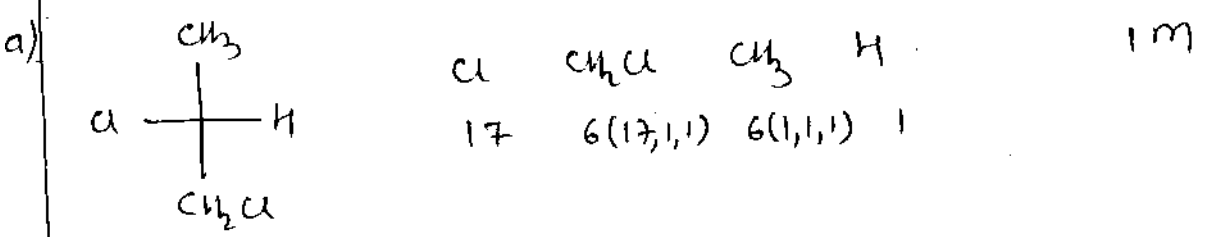
(03) marks

Nitric oxide do not have adverse effect on human health. Hemoglobin has high affinity for NO. NO₂ is highly toxic and type of pollutant NO₂ forms nitrous and nitric acids which attacks the mucous inner lining of the lungs. The acute symptoms are emphysema (pulmonary fibrosis) those regularly exposed to levels of 10-40 ppm of NO₂ are most affected. The exposure to lower concentration of 0.11 - 0.2 ppm for one hour produces changes in airways resistance in asthmatic patients. The lower concentration of NO₂ causes irritation of eyes, throat and lungs.

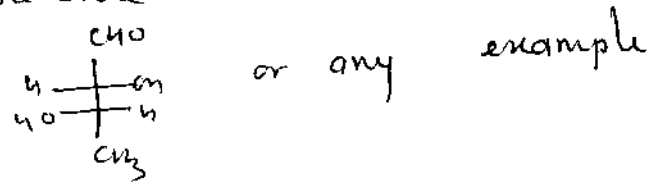
(03) marks

(1)

A) Assign R or S

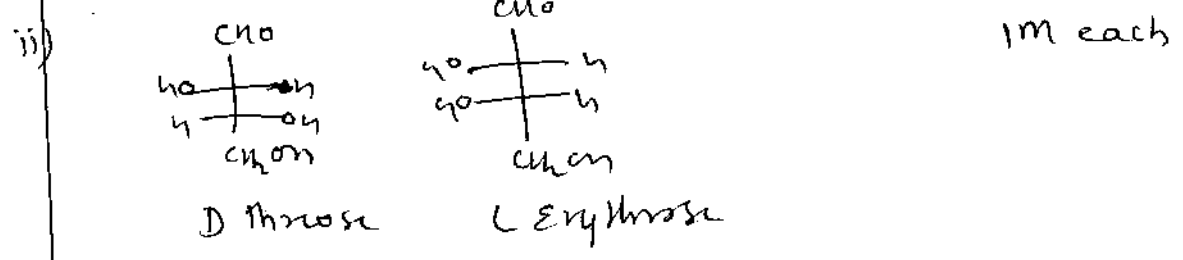


ii) Threo isomer - If two similar groups are on the opposite side then the isomer is called threo isomer $\frac{1}{2}$ M



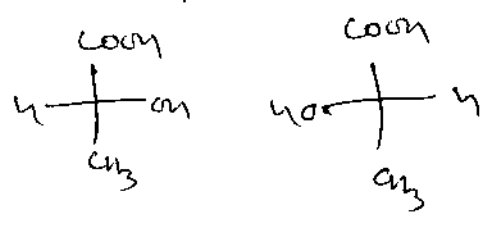
B) i) Chiral molecules 1M each

- a) Chiral b) achiral c) Chiral



12 Enantiomers -

- 1 Enantiomers are optical isomers which are nonsuperimposable mirror images of each other
- 2 They rotate the plane of plane polarised light to the same extent but opposite direction
- 3 One enantiomer is dextro rotatory and other is laevo rotatory
- 4 Identical physical properties i.e. M.P., B.P., density, etc

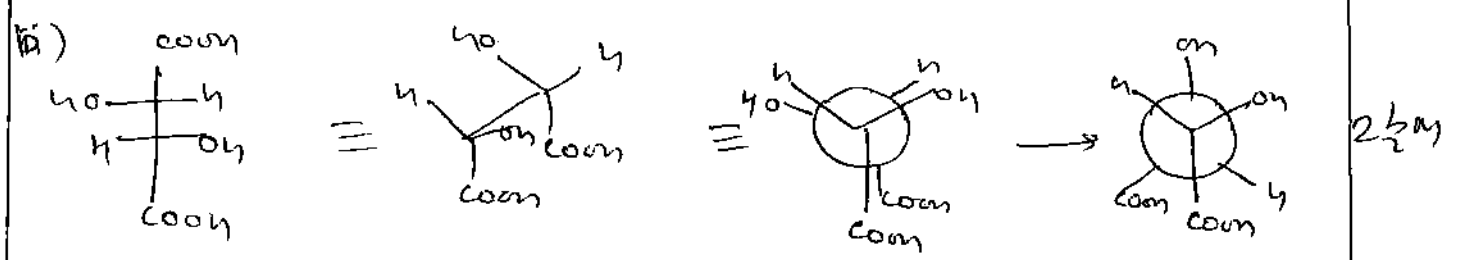
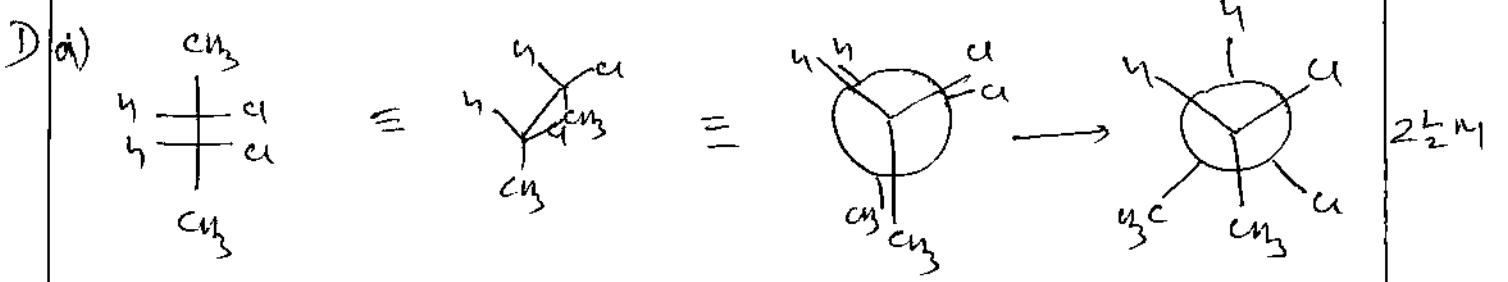


each point ~~1~~ 1
 example $\frac{1}{2} M$
 3 points = $2\frac{1}{2} M$

Racemic forms

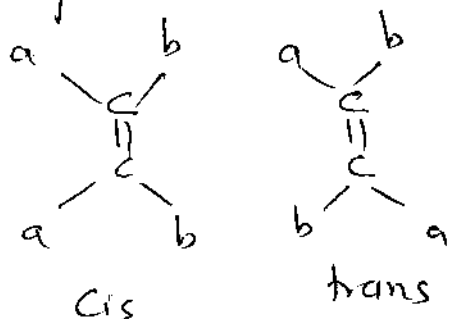
- 1 Mixture containing equal quantities of d & l forms of an optically active compound 1M
- 2 Racemic form is a mixture of 2 isomers and optically inactive due to external compensation $\frac{1}{2} M$
- 3 It is represented as (dl) or (\pm) $\frac{1}{2} M$
- 4 eg. Mixture of d & l lactic acid $\frac{1}{2} M$

3 pts = $2\frac{1}{2} M$



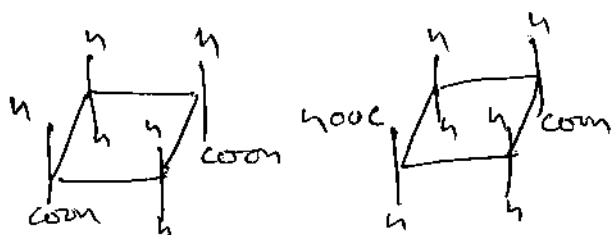
56898

E) 13) Unsaturated compounds and cyclic compounds show geometrical isomerism. Compounds having same structure but different spatial arrangement of groups. 1M



No. of geometrical isomers = 2^n

Cyclic compounds show geometrical isomerism due to the rigidity of the ring. The rotation of C-C bond is restricted. 1M



Cis 1,3 cyclobutane dicarboxylic acid

trans 1,3 cyclobutane dicarboxylic acid

F) ~~stereogenic centre~~ - Specific Rotation - It is defined as the angle of rotation produced by a solution of unit concentration (1g/ml) which is placed in a polarimeter tube of unit length (1dm). 1M

It is denoted as α . It is dependent upon the nature of substance, temperature and wavelength of light. 1M

14

56898

Page 14

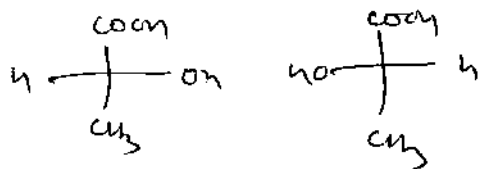
Optical isomerism :-

Two or more molecules having same structure but differ in their action on the plane of polarised light. This phenomenon is called optical isomerism 1M

The molecules rotate the plane of plane polarised light in clockwise direction is dextrorotatory and that which rotates plane of plane polarised light in anticlockwise direction is laevorotatory 1/2M

Chirality - Chirality is a property by which a molecule cannot be superimposed on its own mirror image 1M

e.g. Due to chirality a molecule exists as two enantiomers i.e. dextro & laevo 1/2M



S

56898

Marks
2/5

Q. No.

Q.5. (A) Given $k = 6 \times 10^{-2} \text{ s}^{-1}$

Let initial concentration = a Final concentration $(a-x) = (1/10) \times a$

To determine : t and $t_{1/2}$

Solve: $k = \frac{2.303}{t} \log \frac{a}{(a-x)}$

1 mark

i) To determine time

$$6 \times 10^{-2} = \frac{2.303}{t} \log [a / (1/10 \times a)]$$

2 marks

$$t = 2.303 \times \log 10 / (6 \times 10^{-2}) = 3.84 \text{ seconds}$$

ii) $t_{1/2} = 0.693 / k$

1 mark

$$= 0.693 / (6 \times 10^{-2}) = 1.15 \text{ seconds}$$

1 mark

Q. No.

Marks

- i) Coefficient of viscosity - It may be defined as the force per unit area required to maintain a unit difference of velocity between two consecutive parallel layers of the liquid 1 cm apart. → 1 mark
- ii) Relative viscosity - The term η/η_0 is known as relative viscosity, (η_r). → 1 mark
- iii) Specific viscosity (η_{sp}) - It is relative increase in viscosity and mathematically, may be represented as, → 2 Marks
- $$\eta_{sp} = \frac{\eta - \eta_0}{\eta_0} = \frac{\eta}{\eta_0} - 1 = \eta_r - 1.$$
- iv) Reduced viscosity - The ratio of η_{sp}/c i.e., increase in specific viscosity per unit concentration of the solution is known as reduced viscosity. → 1 mark

56898

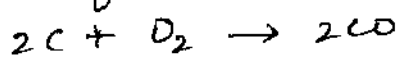
Q5 (17)

c. The two important gaseous inorganic pollutants of carbon are (i) CO_2 (ii) CO (01) mark

Sources of carbon monoxide (any two) (01) mark

(i) Interaction of CO_2 with coke at higher temp in blast furnace. $\text{CO}_2 + \text{C} \rightarrow 2\text{CO}$

(ii) Incomplete combustion of carbonaceous matter in automobile engines, agricultural and slash matter, petroleum refineries



Control Techniques (any two) (01) mark.

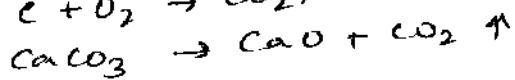
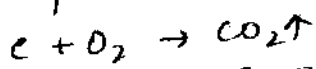
(1) By changing the fuel or the energy source.

(2) longer duration of circulation of the fuel gas in the combustion chamber

Sources of carbon dioxide (any two) (01) mark.

(i) Volcanic activities

(ii) Complete combustion of carbon compounds



Control Techniques

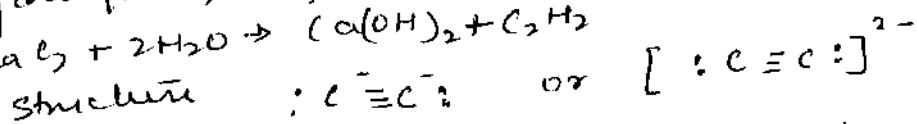
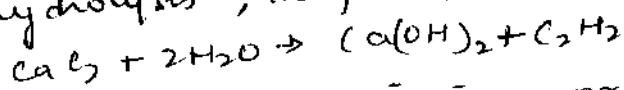
(i) By reducing release from industrial process.

(ii) By increased rate of photosynthesis from increasing forest cover.

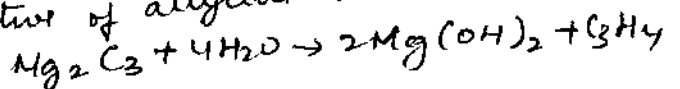
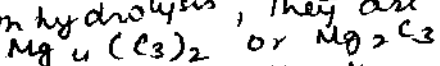
5.D. Carbides are binary compounds of carbon with an element which is more electro positive or less electro negative than carbon. (01) mark.

Characteristics of ionic carbides (02) marks

(i) Acetylides (C_2^{2-} groups) gives acetylene on hydrolysis, they are derivatives of $(\text{HC} \equiv \text{CH})$ eg MgC_2



(ii) Allylides (C_3^{4-} groups) gives allylene ($\text{H}_2\text{C}=\text{C}=\text{CH}_2$) on hydrolysis, they are derivatives of allylene are called allylides



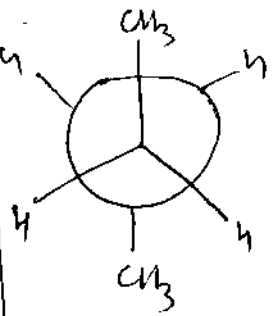
18

Conformational Analysis

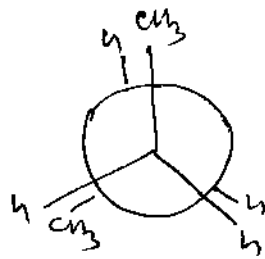
study of relative stabilities of various conformations and relating the properties of the molecule to the stability is called

Conformational Analysis

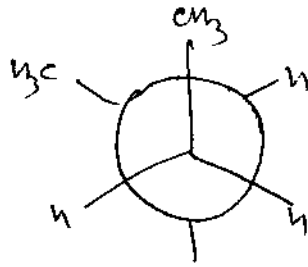
1M



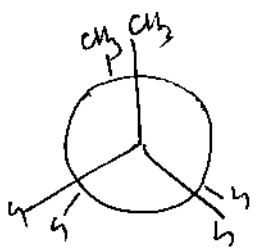
Antiperiplanar
I



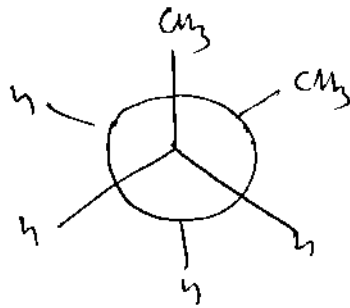
Anticlinal
II



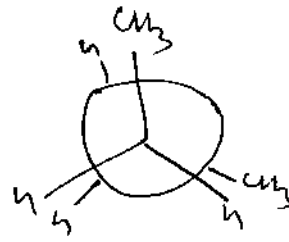
Synclinal (Gauche)
III



Synperiplanar
IV



Synclinal
V



Anticlinal
VI

1/2 M each conformation

3M

Eclipsed conformations - II IV VI

Staggered conformations I III V


Most stable - Antiperiplanar
Most unstable - Synperiplanar
order of stability

Antiperiplanar > Synclinal > Anticlinal > ~~Anti~~ Synperiplanar

1M

- i) ~~19~~ 19
- a Z isomer 1M
- b E isomer 1M

Pair of enantiomers -



a & b 1/2 M

c & d 1/2 M